



MAITRI VIDYA NIKETAN EMSSS, RISALI, BHILAI  
SECOND TERM EXAMINATION 2022-23

TIME – 2hrs.

CLASS – 1 SUBJECT – MATHS

T.M. - 70

Name- \_\_\_\_\_ Class/Sec- \_\_\_\_\_ Roll No- \_\_\_\_\_

Date- \_\_\_\_\_ Marks obtained- \_\_\_\_\_

Sign of Invigilator \_\_\_\_\_ Sign of Valuer \_\_\_\_\_

**Q. 1. Write the M. Table of** (10)

$8 \times 1 =$ _____	$10 \times 6 =$ _____
$8 \times 2 =$ _____	$10 \times 7 =$ _____
$8 \times 3 =$ _____	$10 \times 8 =$ _____
$8 \times 4 =$ _____	$10 \times 9 =$ _____
$8 \times 5 =$ _____	$10 \times 10 =$ _____

**Q. 2. Write the number names** (2)

A) 50 \_\_\_\_\_ B) 69 \_\_\_\_\_

**Q. 3. Write the number for given number names** (2)

A) Thirty Five \_\_\_\_\_ B) Eighty Two \_\_\_\_\_

**Q. 4. Write the between number** (2)

A) 28 \_\_\_\_\_ 30      B) 67 \_\_\_\_\_ 69

**Q. 5. Write the after number** (2)

A) 46 \_\_\_\_\_      B) 77 \_\_\_\_\_

**Q. 6. Circle the smallest number** (2)

A) 41 36 59 24      B) 35 76 82 40

**Q. 7. Write the missing numbers** (2)

96 \_\_\_\_\_ 98 \_\_\_\_\_ 100

**Q. 8. Add and write**

**(4)**

A)  $94$   
 $+ 5$   
\_\_\_\_\_

B)  $40$   
 $+ 19$   
\_\_\_\_\_

C)  $70+10=$  \_\_\_\_\_

D)  $20+40=$  \_\_\_\_\_

**Q. 9. Subtract and write**

**(4)**

A)  $58$   
 $- 3$   
\_\_\_\_\_

B)  $65$   
 $- 40$   
\_\_\_\_\_

C) Subtract 50 from 95 = \_\_\_\_\_  
\_\_\_\_\_  
\_\_\_\_\_

D) subtract 60 from 88 = \_\_\_\_\_  
\_\_\_\_\_  
\_\_\_\_\_

**Q. 10. Multiply and write**

**(4)**

A)  $5 \times 5 =$  \_\_\_\_\_

B)  $7 \times 7 =$  \_\_\_\_\_

C) 6 times 4 is = \_\_\_\_\_ x \_\_\_\_\_ = \_\_\_\_\_

D) 3 times 9 is = \_\_\_\_\_ x \_\_\_\_\_ = \_\_\_\_\_


**Q. 11. Write the time in given blanks**

**(2)**




Q. 12. Draw the hands of the clock to show the given time

(2)



4:00



9:00

Q. 13. Write T for True F for False

(6)

- 1) There are 7 days in a week.
- 2) The first month of the year is November.
- 3) The last day of the week is Sunday.
- 4) Friday comes after Thursday.
- 5) Republic Day is celebrate on 26<sup>th</sup> January.
- 6) We celebrate Gandhi Jayanti on 15<sup>th</sup> August.

\_\_\_\_\_

\_\_\_\_\_

\_\_\_\_\_

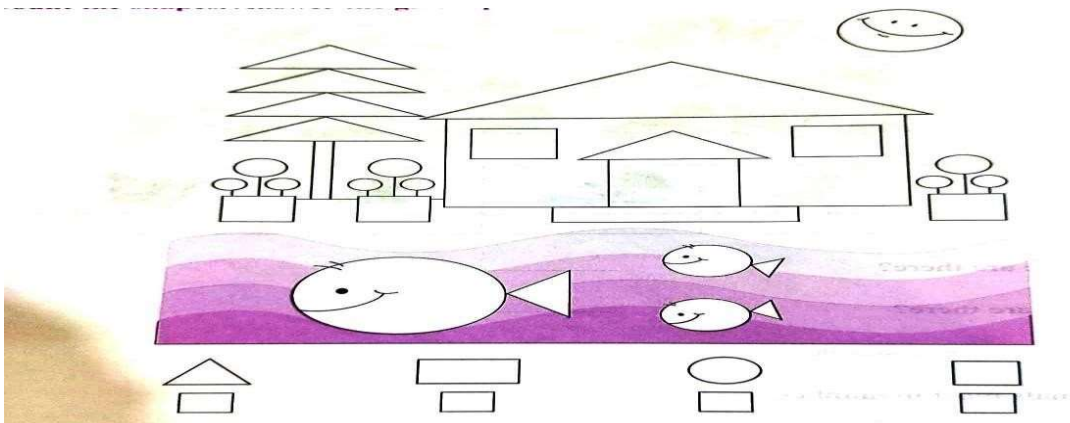
\_\_\_\_\_

\_\_\_\_\_

\_\_\_\_\_

Q. 14. See the picture and count the shapes

(4)



Q. 15. Tick the correct option

(5)

- 1) A clock tell us --  
A) Direction    B) Time    C) Speed
- 2) How many months are there in a year ?  
A) 7    B) 6    C) 12
- 3) What is the correct spelling of 90 ?  
A) Ninety    B) Nineteen    C) Ninty

4) What is the product of  $2 \times 5$  ?

A) 10    B) 15    C) 20

5) What is the number name of 7 tens and 6 ones ?

A) 76    B) Seventy Nine    C) seventy six

Q. 16. Match the amount of money with the cost of the items

(5)

1. ₹ 5 + ₹ 15

2. ₹ 5 + ₹ 5

3. ₹ 10 + ₹ 10 + ₹ 10

4. ₹ 2 + ₹ 3

5. ₹ 1 + ₹ 2

a.  ₹ 3

b.  ₹ 30

c.  ₹ 20

d.  ₹ 10

e.  ₹ 5

Q. 17. Expand these numbers and write the number names

(6)

A) 74 is = \_\_\_\_\_ tens + \_\_\_\_\_ ones = \_\_\_\_\_

B) 25 is = \_\_\_\_\_ tens + \_\_\_\_\_ ones = \_\_\_\_\_

C) 88 is = \_\_\_\_\_ tens + \_\_\_\_\_ ones = \_\_\_\_\_

Q. 18. Word Problems

(3+3=6)

A) 52 books have blue covers. 23 books have red covers. How many are there in all?

SOLVE: Blue cover books = \_\_\_\_\_

Red cover books = ( ) \_\_\_\_\_

Total Books = \_\_\_\_\_

ANS. Total books \_\_\_\_\_ in all.

B) There are 35 students in the class. 15 of them are girls. How many are boys?

SOLVE : Total no. of students = \_\_\_\_\_

No. of Girls = ( ) \_\_\_\_\_

No. of Boys = \_\_\_\_\_

ANS. No. of Boys \_\_\_\_\_ in total students.

---